

B. Tech. 7th Semester (Civil Engg.) Examination,

May-2011

ESTIMATING & COSTING

Paper - CE-405-E

Time allowed : 3 hours]

[Maximum marks : 100

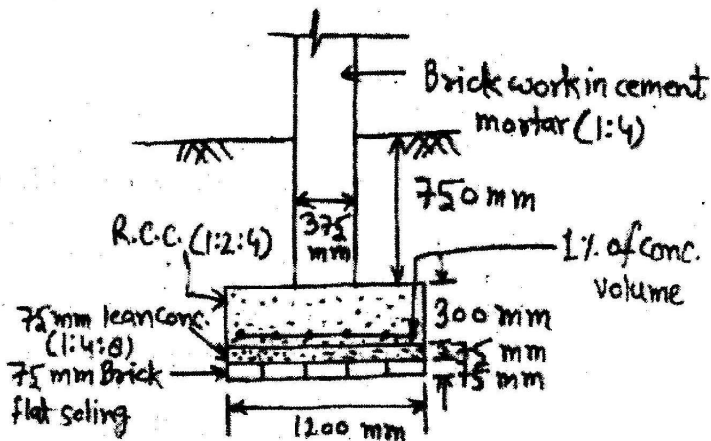
Note : Attempt any five questions.

1. (a) What is estimate, how it differs from actual cost?

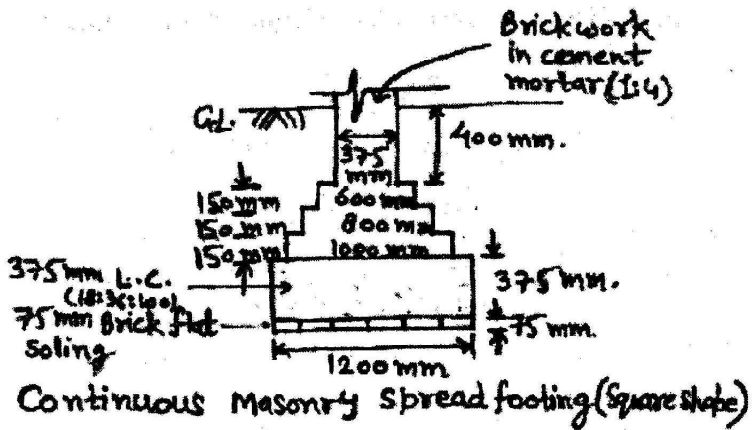
Write the purpose of estimation as well. 10

- (b) Compare the quantities of following items in the

figure (fig.-1) given below : 10



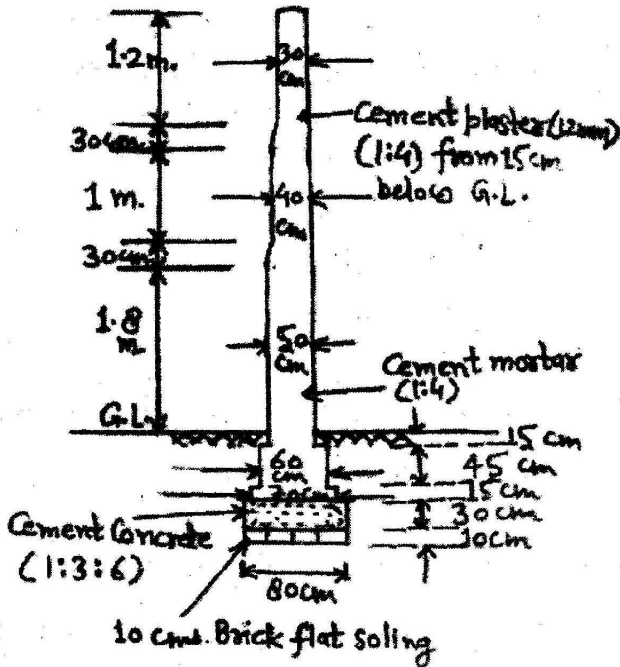
Continuous concrete raft footing
(Square shape)



- (i) Earthwork in excavation in foundation.
 - (ii) 75 mm. thick brick flat soling.
 - (iii) Brick work in footing.
 - (iv) Quantity of total concrete consumed in footing.
2. (a) Define specification and discuss its necessity. Also write the different types of specifications.
- 10
- (b) Write specification about following materials :
- (i) Sand
 - (ii) Lime
 - (iii) Cement
 - (iv) Bricks
- 10

3. (a) Discuss the advantages and disadvantages of open, restricted and closed specification. 10
- (b) Write detailed specification about following works : 10
- (i) Painting
- (ii) Cement plastering
4. (a) Why rate analysis is done and how we prepare the rate per unit of an item? 10
- (b) Write the rate analysis for lime concrete in foundation with 40 mm. down stone ballast, lime and sand proportioning (1:2:4) for first 10 cum. Assume local rates for various items. 10
5. (a) Define following terms : 10
- (i) General overheads
- (ii) Job overheads
- (iii) Task or out-turn work

- (b) Give complete material estimation for the given figure (fig. 2) : 10



6. (a) Describe contract with its various types. 10
- (b) Define following terms : 10
- (i) Sinking fund
 - (ii) Salvage value
 - (iii) Tender
 - (iv) Retention money
 - (v) Technical sanction

7. (a) Describe about different methods of valuation.

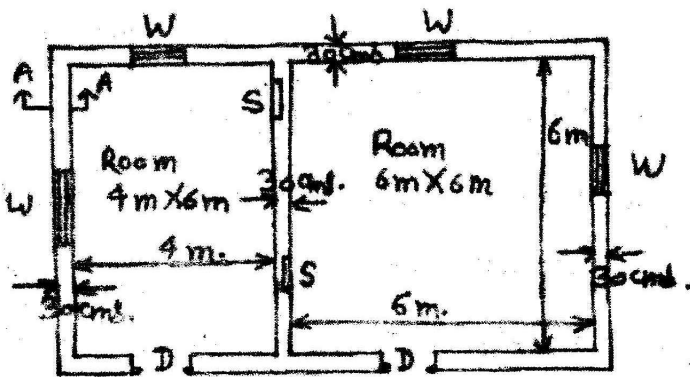
10

- (b) A lease-hold property is to produce a net income of rupees 12000/- per annum for the next 60 years. What is the value of property? Assume that the landlord desires a return of 6% on his capital and the sinking fund to replace the capital is also to accumulate at 6%.

10

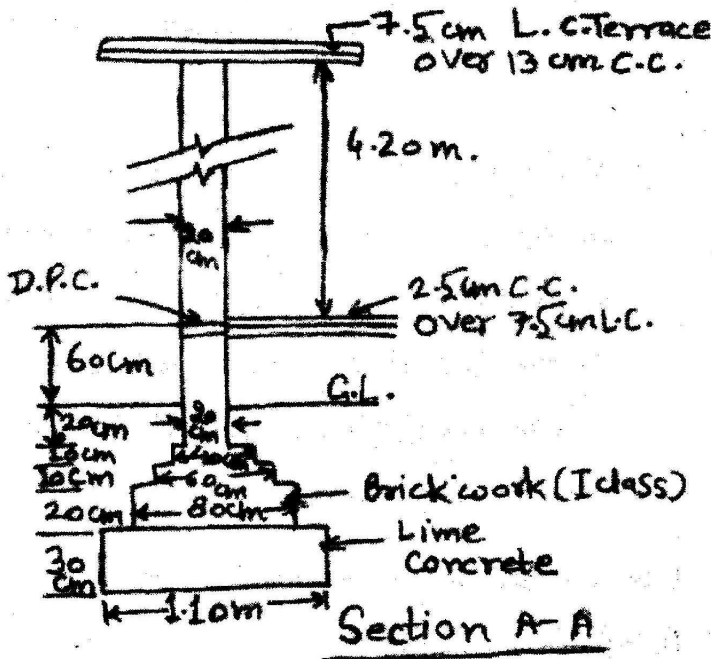
8. Calculate the following quantities from the given figure (fig. 3) :

20



Plan

Door, $D = 1.20\text{m} \times 2.10\text{m}$
 Window, $W = 1.00\text{m} \times 1.50\text{m}$
 Shelves, $S = 1.00\text{m} \times 1.50\text{m}$.



- (i) Earthwork in excavation in foundation.
- (ii) Lime concrete in foundation.
- (iii) 1 class brickwork in cement mortar 1:6 in foundation and plinth.
- (iv) 2.5 cm. thick cement concrete damp proof course.
- (v) 1 class brickwork in lime mortar in superstructure.